

英文姓名: _____

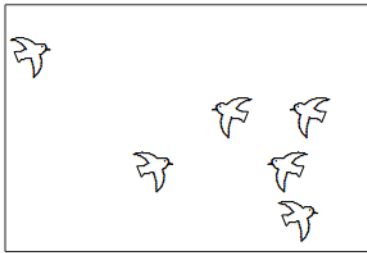
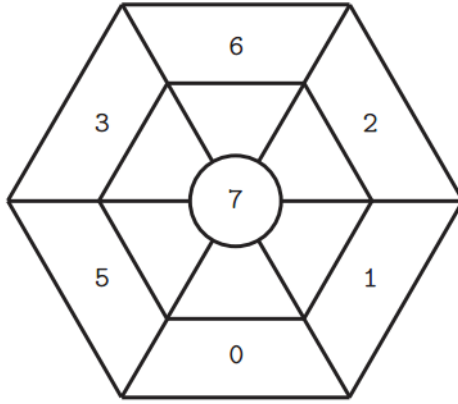
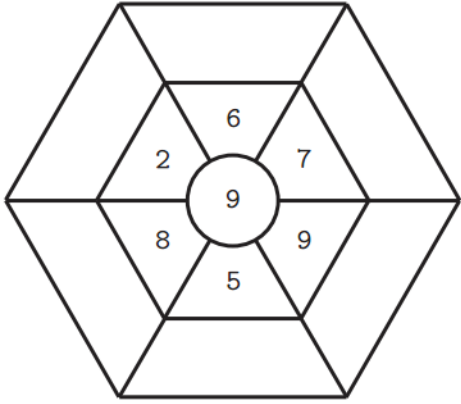
成績: _____

Fill in the blanks:

填入正确数字:

(+)

(-)



(a) $6 + 2 = (\quad)$

(c) $8 - 6 = (\quad)$

(b) $2 + 6 = (\quad)$

(d) $8 - 2 = (\quad)$

7	3
- 3	+ 6