

中文姓名: _____

12-1

英文姓名: _____

成績: _____

$$\begin{array}{r} \square 1 \\ + \quad \square \\ \hline 28 \end{array}$$

$$\begin{array}{r} 27 \\ - \quad \square \\ \hline \square 6 \end{array}$$

$$\begin{array}{r} 7 \square \\ - \quad 5 \\ \hline \square 4 \end{array}$$

$$\begin{array}{r} 12 \\ + \quad 9 \\ \hline 2 \square \end{array}$$

$$\begin{array}{r} 97 \\ - \quad \square \\ \hline \square 1 \end{array}$$

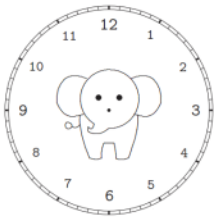
8	9	10	13	7	19	4	16
+ 9	+ 11	- 2	+ 12	+ 18	+ 18	+ 7	- 1

1. Please draw the clock hands:

1. 画时针跟分针:


2. Please write down what time it is:

2. 这是几点?



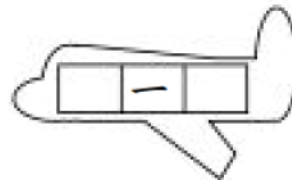
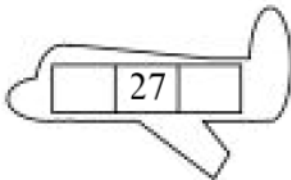
五点三十分。

05:30.



Please write down before and after numbers:

For calendar question: before number is yesterday's date & after number is tomorrow's date.



1.Q: 今天是几月几号/日?

1.A: _____

1.Q: 今天星期几?

1.A: _____

2.Q: 明天是几月几号/日?

2.A: _____

2.Q: 明天星期几?

2.A: _____

3.Q: 昨天是几月几号/日?

3.A: _____

3.Q: 昨天星期几?

3.A: _____

Q: What is the date today?

A: _____

Q: What is the day of the week today?

A: _____

Q: What is the date tomorrow?

A: _____

Q: What is the day of the week tomorrow?

A: _____

Q: What was the date yesterday?

A: _____

Q: What was the day of the week yesterday?

A: _____

- 1. 今天是三月二十七日。
- 1. 今天是星期一。
- 2. 明天是三月二十八日。
- 2. 明天是星期二。
- 3. 昨天是三月二十六日。
- 3. 昨天是星期日/星期天。