

中文姓名: _____

17-1

英文姓名: _____

成績: _____

$\begin{array}{r} 69 \\ - 31 \\ \hline \end{array}$	$\begin{array}{r} 22 \\ + 32 \\ \hline \end{array}$	$\begin{array}{r} 94 \\ - 38 \\ \hline \end{array}$	$\begin{array}{r} 62 \\ + 60 \\ \hline \end{array}$	$\begin{array}{r} 28 \\ + 89 \\ \hline \end{array}$	$\begin{array}{r} 61 \\ - 10 \\ \hline \end{array}$	$\begin{array}{r} 37 \\ + 80 \\ \hline \end{array}$	$\begin{array}{r} 32 \\ - 27 \\ \hline \end{array}$

$\begin{array}{r} 10 \\ - 7 \\ - 2 \\ \hline \end{array}$	$\begin{array}{r} 15 \\ - 3 \\ - 10 \\ \hline \end{array}$	$\begin{array}{r} 20 \\ - 14 \\ - 1 \\ \hline \end{array}$	$\begin{array}{r} 15 \\ - 2 \\ - 2 \\ \hline \end{array}$	$\begin{array}{r} 18 \\ - 3 \\ - 5 \\ \hline \end{array}$	$\begin{array}{r} 17 \\ - 5 \\ - 8 \\ \hline \end{array}$	$\begin{array}{r} 16 \\ - 6 \\ - 3 \\ \hline \end{array}$	$\begin{array}{r} 18 \\ - 1 \\ - 15 \\ \hline \end{array}$

$\begin{array}{r} 10 \\ + 15 \\ + 15 \\ \hline \end{array}$	$\begin{array}{r} 15 \\ + 11 \\ + 5 \\ \hline \end{array}$	$\begin{array}{r} 2 \\ + 9 \\ + 9 \\ \hline \end{array}$	$\begin{array}{r} 3 \\ + 14 \\ + 4 \\ \hline \end{array}$	$\begin{array}{r} 17 \\ + 10 \\ + 18 \\ \hline \end{array}$	$\begin{array}{r} 7 \\ + 2 \\ + 5 \\ \hline \end{array}$	$\begin{array}{r} 15 \\ + 1 \\ + 17 \\ \hline \end{array}$	$\begin{array}{r} 9 \\ + 18 \\ + 10 \\ \hline \end{array}$

有几个“等分”? (等分 = 一样大)

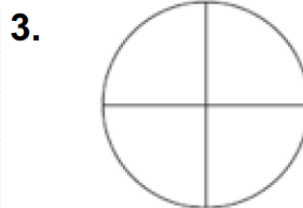
Please write down how many “equal” area shapes there are.



_____ 个相等的部份




_____ 0 _____ 个相等的部份



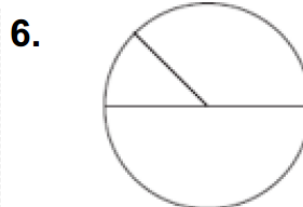
_____ 个相等的部份



_____ 个相等的部份



_____ 个相等的部份



_____ 个相等的部份