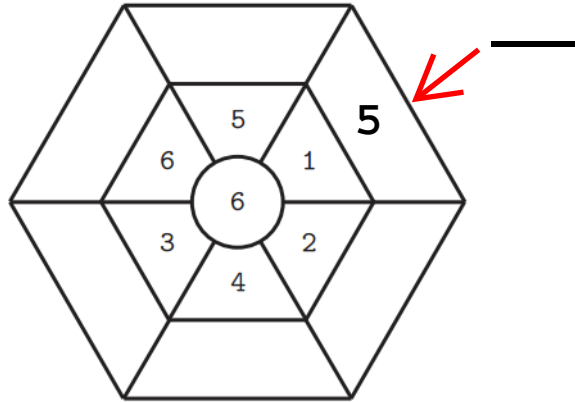
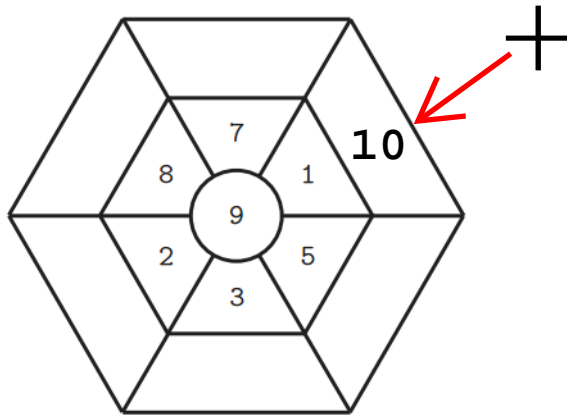


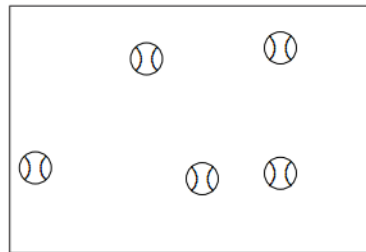
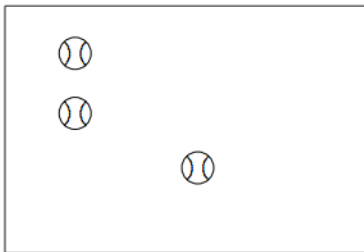
英文姓名: _____

成績: _____

(1) Read plus or minus sign first. (2) Do your addition or subtraction problems.



	1	6	8	2			
+	7	+	2	-	2	+	5



(a) $3 + 5 = (\quad)$

(c) $8 - 3 = (\quad)$

(b) $5 + 3 = (\quad)$

(d) $8 - 5 = (\quad)$