
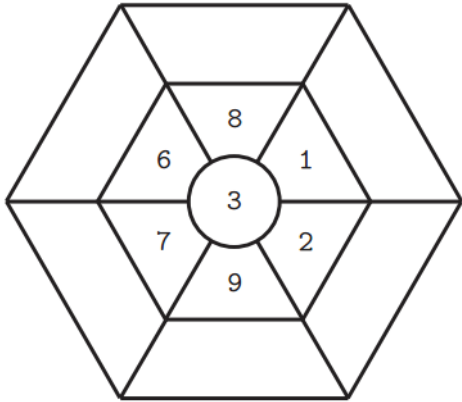


英文姓名: \_\_\_\_\_

成績: \_\_\_\_\_

(1) Read plus or minus sign first. (2) Do your addition or subtraction problems.

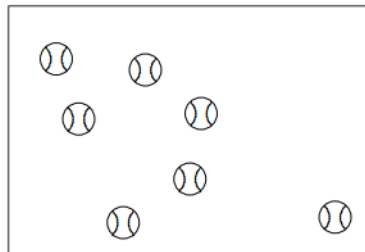
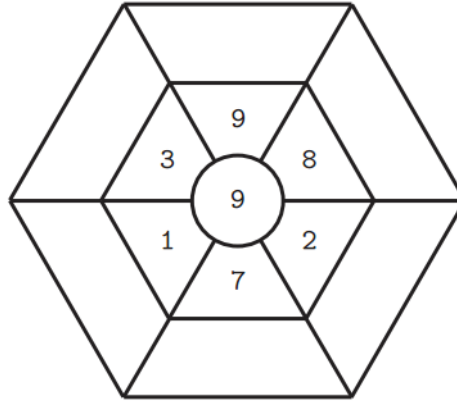
( + )



(a)  $1 + 7 = ( \quad )$

(b)  $7 + 1 = ( \quad )$

( - )



(c)  $8 - 1 = ( \quad )$

(d)  $8 - 7 = ( \quad )$

7	7
- 6	+ 1